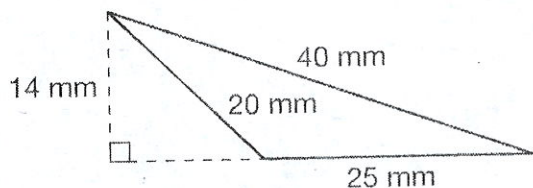


Warm Up!

Name: _____
Date: _____

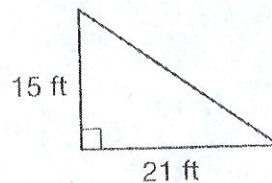
Lesson 24: Area of Triangles

7. What is the area of this triangle?



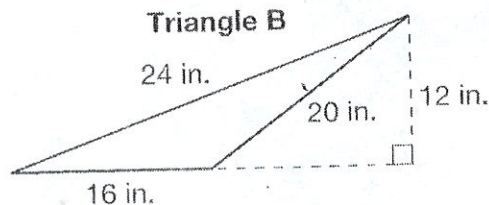
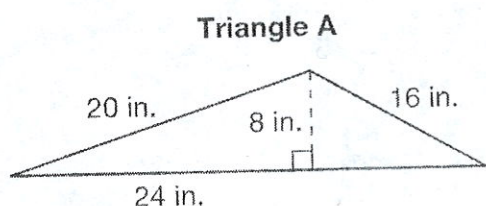
- A. 140 mm^2
- B. 175 mm^2
- C. 200 mm^2
- D. 400 mm^2

8. What is the area of this triangle?



- A. 315 ft^2
- B. 305 ft^2
- C. 285 ft^2
- D. $157\frac{1}{2} \text{ ft}^2$

9. Mrs. Green drew these two triangles on the board.



- A. What is the area of triangle A? Show your work.

- B. What is the area of triangle B? Show your work.

- C. What do you notice about the two triangles? Explain your answer.
